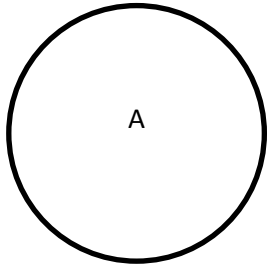
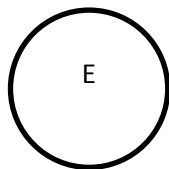
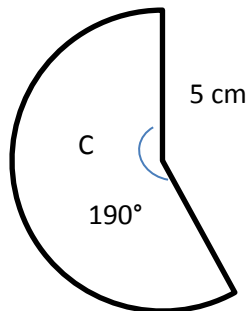
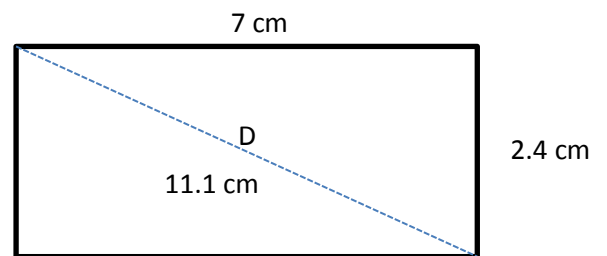
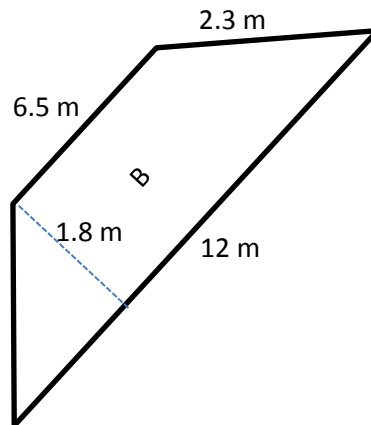


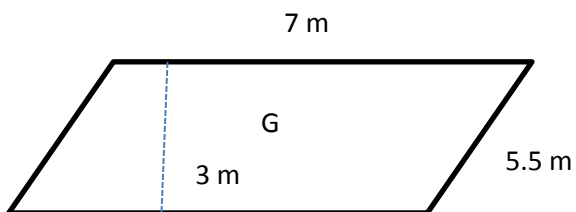
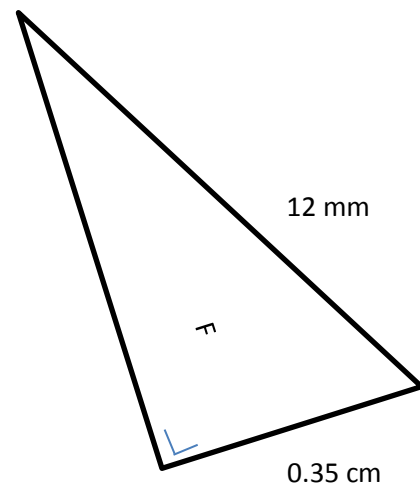
Calcule l'aire des figures suivantes :



Cercle de rayon : 4 dm



Cercle de diamètre 3 cm



Réponses :

L'aire de la figure A : **50.26 dm²**

L'aire de la figure B : **16.65 m²**

L'aire de la figure C : **41.45 cm²**

L'aire de la figure D : **16.8 cm²**

L'aire de la figure E : **7.07 cm²**

L'aire de la figure F : **20.09 mm²**

L'aire de la figure G : **21 m²**