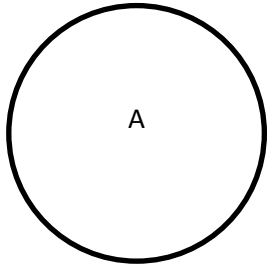
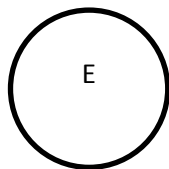
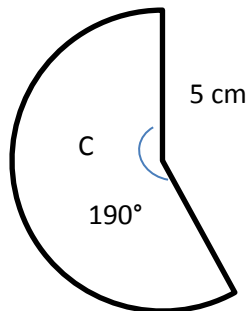
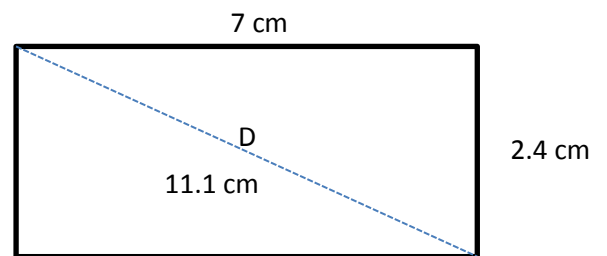
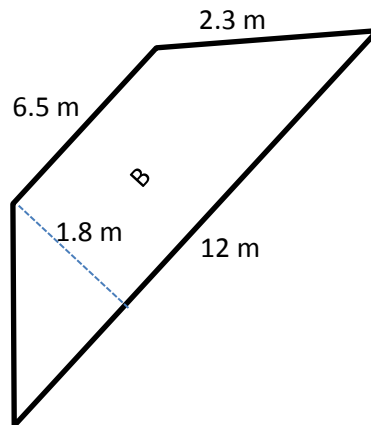


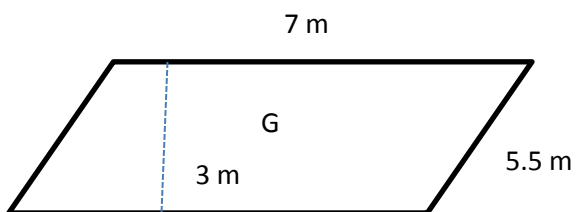
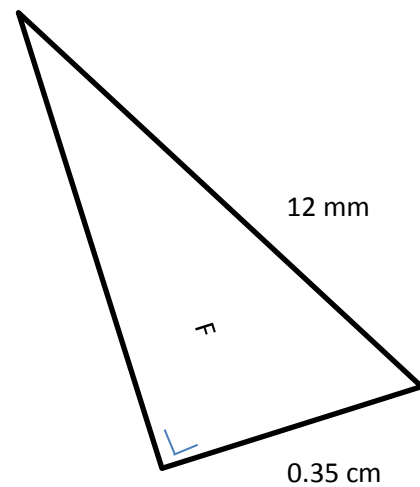
Calcule le périmètre des figures suivantes :



Cercle de rayon : 4 dm



Cercle de diamètre 3 cm



Réponses :

Périmètre de la figure A : **25.13 dm**

Périmètre de la figure B : **23.1 m**

Périmètre de la figure C : **26.58 cm**

Périmètre de la figure D : **18.8 cm**

Périmètre de la figure E : **9.42 cm**

Périmètre de la figure F : **26.98 mm**

Périmètre de la figure G : **25 m**