
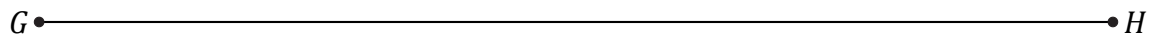





Médiatrice d'un Segment (A)

Nom: _____

Date: _____

Construisez la médiatrice à l'aide d'une règle et un compas.



Médiatrice d'un Segment (A) Réponses

Nom: _____

Date: _____

Construisez la médiatrice à l'aide d'une règle et un compas.

